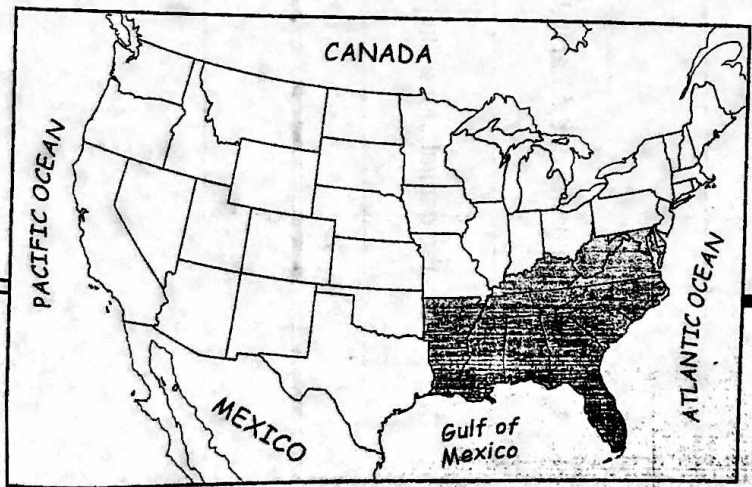
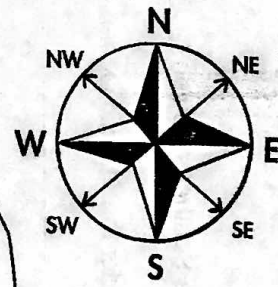
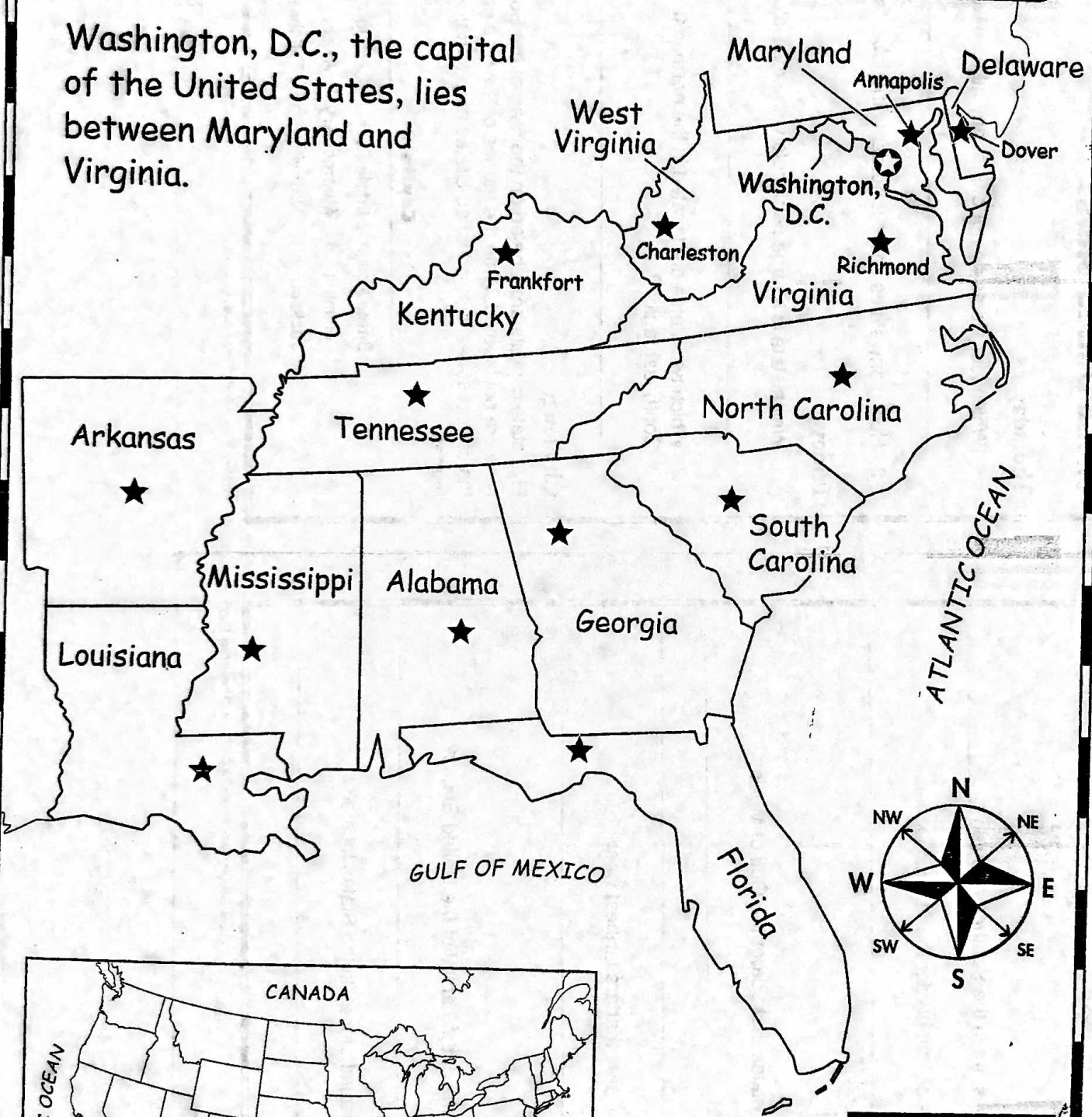


The Southeast Region of the United States

Washington, D.C., the capital of the United States, lies between Maryland and Virginia.



Map Key

- ★ state capital
- ☆ national capital

Name _____

The Southeast Region of the United States

WEEK 22

Monday

- How many states are in the Southeast region? _____
- Name three states that border the Atlantic Ocean.

Tuesday

- Name the four states that border the Gulf of Mexico.

- Name the two states that are farthest west.

Wednesday

- What is the name of the capital of the United States?

- Where is the capital of the United States located?

Name _____

The Southeast Region of the United States

WEEK 22

Thursday

- Which four states do not border any labeled waterway?

- How many states share a border with Alabama?

Friday

- Which state is a large peninsula with small islands off its coast?

- Which two states are located in the northeast tip of the Southeast region?

Challenge

Five state capitals are labeled on the map of the Southeast region. Nine are not labeled. Write the names of the nine capitals on the correct states. Use a United States map to help you with the names.

Capitals

Baton Rouge	Little Rock	Raleigh
Columbia	Montgomery	Atlanta
Jackson	Nashville	Tallahassee